



CLASS-III	AARAMBH	DATE: 01-10-19
Max. Time: 90 min		Max marks: 160

Instructions:

- i. The test paper consists of **40** multiple choice questions numbered from **1 to 40**, each question followed by four alternatives 1, 2, 3 and 4.
- ii. Mathematics and Mental Ability 1 to 20, Science 21 to 30, English 31 to 40.
- iii. Each question has only one correct option.
- iv. Each correct answer carries **+4 Marks**.
- v. No negative marking for wrong answer.






MATHEMATICS & MENTAL ABILITY (Q.NO.1 TO 20)

1. The picture table below shows the number of students who absent in a day of a particular week

Monday	
Tuesday	
Wednesday	
Thursday	_____
Friday	
Saturday	
Each means 4 students	

On which day no student was absent?

- 1) Monday 2) Thursday 3) Friday 4) Saturday
2. The picture table shows the number of children who came to story hour Saturday in each week.
How many children’s came to story hour in week 1?

Story Hour Attendance	
Week	Number of Children's
1	
2	
3	
4	
Each  = 4 children's	

1) 3

2) 12

3) 4

4) 6

3. Arrange the letters A,L,P,T,N in an order to form a meaningful word.

1) NAPTL

2) LAPNT

3) PLANT

4) TALNP

4. Which is the smallest value?

1) 300m

2) 200m

3) 200cm

4) 300cm

5. Which of these has a capacity of about 10 ml?



1)

2)

3)

4)

1) 3

2) 2

3) 1

4) 4

6. If 1 Car length = 5cm, then length of 5 Cars = _____cm

1) 10

2) 15

3) 20

4) 25

7. 3698 _____ 8639

1) <

2) >

3) =

4) none of these

8. Write XIV in Hindu Arabic Numeral.

1) 10

2) 14

3) 16

4) 15

9. Round off 459 to the nearest 100.

1) 460

2) 500

3) 400

4) 450

10. 7tens 5ones = _____tens 15ones

1) 6

2) 8

3) 7

4) 5

11. $6 \times 13 =$ _____

1) 48

2) 98

3) 68

4) 78

12. $365 + 10 =$ _____
1) 465 2) 365 3) 375 4) 605
13. 2, 4, 6, 8, _____
1) 10 2) 9 3) 12 4) none of these
14. What is the smallest 2digit numbers using 8 and 2 without repeating the digits
1) 82 2) 22 3) 28 4) 88
15. A triangle is a closed planar shape with
1) 2 sides 2) 4 sides 3) 3sides 4) 5sides
16. 20,26,32,38, _____ , 50
1) 42 2) 48 3) 44 4) 46
17. $1000 -$ _____ $= 999$
1) 2 2) 0 3) 1 4) 3
18. A cuboid has _____ edges
1) 6 2) 12 3) 8 4) 10
19. 1 ₹ = 5 Rs, 6 ₹ = _____ Rs
1) 20 2) 25 3) 35 4) 30
20. The place value of 4 in 8429 is = _____
1) 4 2) 40 3) 400 4) 4000

SCIENCE (Q.NO.21 TO 30)

21. Skin, ears, and kidneys are examples of _____.
1) organ systems 2) organs 3) tissues 4) cell
22. The human heart has _____ chambers (rooms).
1) Two 2) Five 3) Three 4) Four
23. Plants get carbon-dioxide from the
1) soil 2) sand 3) leaves 4) air
24. Rose : Shrubs :: Grape : ?

- 1) Tree 2) Climber 3) Shrubs 4) None of these
25. Which of the following is not needed for photosynthesis?
1) Iodine solution 2) Chlorophyll 3) Carbon dioxide 4) Water
26. When a solid changes to a liquid, it is known as _____.
1) Condensation 2) Evaporation 3) Melting 4) None of these
27. _____ soil is the best soil to make pots.
1) sandy 2) loamy 3) clayey 4) all of the above
28. Plant-eating animals have ____ and ____ front teeth to bite off leaves and grass.
1) small, narrow 2) flat, broad 3) short, broad 4) narrow, flat
29. A living things is called a(n)
1) biotic factor 2) abiotic factor 3) organism 4) cell
30. Which of the following is a good source of iron?
1) Green vegetables 2) Potato 3) Tomato 4) Beetroot

ENGLISH (Q.NO.31 TO 40)

31. Choose the word that comes FIRST in alphabetical order.
1) peacock 2) parrot 3) pickle 4) plate
32. Select the correctly spelt word.
1) aniversary 2) anniversari 3) anniversaree 4) anniversary
33. Which word rhymes with SOUTH?
1) breath 2) pouch 3) couch 4) mouth
34. Antonym for **timid** is _____.
1) shy 2) brave 3) fearful 4) afraid
35. What is the plural form of **knife**?
1) knives 2) knives 3) knife 4) knifess

36. Which of these sentences are punctuated correctly?

1) My neighbours bought flowers, crackers and sweets for Diwali.

2) My, neighbours bought flowers, crackers and sweets for Diwali.

3) My neighbours bought, flowers, crackers and sweets for Diwali.

4) My neighbours bought flowers, crackers and, sweets for Diwali.

37. Choose the correct article.

_____ dog that bit me ran away.

1) A

2) An

3) The

4) no article

38. Choose the correct option.

It was Tom's birthday so I bought _____ her a gift.

1) him

2) he

3) his

4) it

39. Choose the correct option.

I _____ sleeping when the telephone rang.

1) am

2) was

3) were

4) is

40. My brother is an artist. The word 'brother' is what type noun?

1) proper noun

2) common noun

3) abstract noun

4) compound noun