



CLASS-IV	AARAMBH	DATE: 01-10-19
Max. Time: 90 min		Max marks: 160

Instructions:

- i. The test paper consists of **40** multiple choice questions numbered from **1 to 40**, each question followed by four alternatives 1, 2, 3 and 4.
- ii. Mathematics and Mental Ability 1 to 20, Science 21 to 30, English 31 to 40.
- iii. Each question has only one correct option.
- iv. Each correct answer carries **+4 Marks**.
- v. No negative marking for wrong answer.

MATHEMATICS & MENTAL ABILITY (Q.NO.1 TO 20)

1. Four lakh one thousand four hundred six is written as____.

1) 4,10,406	2) 4,01,406	3) 40,14,006	4) 40,10,406
-------------	-------------	--------------	--------------
2. Round off the number 86 to the nearest 10.

1) 80	2) 100	3) 90	4) 70
-------	--------	-------	-------
3. $95,807 + 1000 =$ _____.

1) 95,907	2) 95,907	3) 97,807	4) 96,807
-----------	-----------	-----------	-----------
4. $5,78,521 - \text{_____} = 5,78,521$

1) 100	2) 1	3) 0	4) None
--------	------	------	---------
5. Write 5×6 as a repeated sum.

1) $5 \times 6 = 5 + 6$	2) $5 \times 6 = 5 + 5 + 5 + 5 + 5 + 5$
3) $5 \times 6 = 6 + 6 + 6 + 6 + 6 + 6$	4) $5 \times 6 = 6 + 6 + 6 + 6$
6. Which of the following is not a factor of 8?

1) 2	2) 4	3) 1	4) 6
------	------	------	------
7. The number left over after dividing is called _____.

1) Remainder	2) Quotient
3) Divisor	4) Dividend
8. Which of the following is an example for Improper Fraction?

- 1) $\frac{2}{3}$ 2) $\frac{1}{6}$ 3) $\frac{7}{3}$ 4) None

9. A _____ is a collection of points extended endlessly in both the directions.

- 1) line 2) line segment 3) ray 4) None

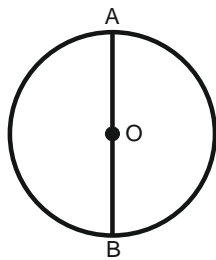
10. A closed figure formed with 3-line segments is called _____.

- 1) square 2) triangle 3) rectangle 4) circle

11. $\frac{2}{9}$ _____ $\frac{7}{9}$.

- 1) > 2) < 3) = 4) None

12. The radius of the circle is _____.



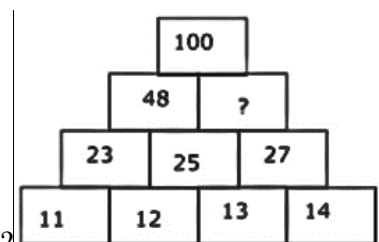
- 1) AB 2) OA 3) O 4) None

13. 3, 13, 23, 33, _____.

- 1) 43 2) 34 3) 25 4) 53

14. A1, B2, C3, _____, E5.

- 1) A2 2) F3 3) B1 4) D4



15. In the given pattern. What will be the answer in the (?) mark?



- 1) 42 2) 52 3) 62 4) 32

16. If ADD is written as 144 and READ is written as 9514, how is DEAD coded?

- 1) 4154 2) 5144 3) 4514 4) 1544








17. ABC, BCD, CDE, _____, EFG.

- 1) DEF 2) EFD 3) EDF 4) FGH

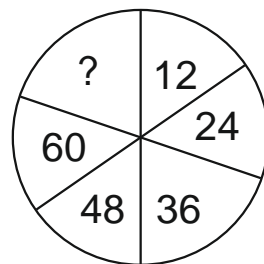
18. If  =3, then  = _____

- 1) 4 2) 18 3) 6 4) 9

19. Find out the alternative figure which contains figure (X) as its part

- a)  b)  c)  d) X
- 1)  2)  3)  4) 

20. What will be the answer in place of (?) In the given picture?



- 1) 12 2) 84 3) 72 4) 98

SCIENCE (Q.NO.21 TO 30)

21. Cactus grows in _____ areas.
1) Hilly 2) desert 3) marshy 4) humid
22. Carbon dioxide enters the plant through tiny pores called _____.
1) Petiole 2) xylem 3) stomata 4) none of these
23. Animals that live mostly on trees are called _____ animals.
1) Aquatic 2) terrestrial 3) arboreal 4) none of these
24. The nutrients from the digested food are absorbed by the:
1) Food pipe 2) small intestine 3) stomach 4) pharynx
25. Which of these carry blood to all parts of the body?
1) Liver 2) veins 3) arteries 4) lungs
26. We exhale to give out air containing _____.
1) Oxygen 2) carbon dioxide 3) nitrogen 4) hydrogen
27. The process in which insoluble particles settle down is known as _____.
1) Decantation 2) sedimentation 3) evaporation 4) freezing
28. 'Cu' is symbol of:
1) carbon 2) chlorine 3) copper 4) calcium
29. The _____ is actually a wheel and axle that is combined with a rope or chain.
1) wedge 2) pulley 3) screw 4) none of these
30. Which of the following does not have to be cooked before eating?
1) carrot 2) rajma 3) potato 4) rice

ENGLISH (Q.NO.31 TO 40)

31. Choose the antonym.

frequent

- 1) often 2) always 3) seldom 4) regular

32. Choose the correct prefix.

merge

- 1) pre 2) non 3) dis 4) sub

33. Choose the correct suffix.

brilliant

- 1) ance 2) ence 3) ing 4) ment

34. Which word in the sentence is a compound word?

We played cricket in the playground on Friday.

- 1) cricket 2) playground 3) friday 4) layed

35. Choose the antonym.

ascend

- 1) presence 2) refuse 3) modern 4) descend

36. Choose the correct prefix.

literate

- 1) co 2) de 3) il 4) dis

37. Choose the correct suffix.

Intelligent

- 1) ance 2) ence 3) ing 4) ment

38. Which word below is a compound word?

- 1) sunshine 2) foods 3) agreement 4) beautiful

39. Which is the abstract noun?

To my delight, I found a puppy in the basket.

- 1) found 2) puppy 3) basket 4) delight

40. Choose the appropriate homophone.

Could you _____ the film for a minute?

- 1) paws 2) pause
3) either could be used here 4) pass