



Instructions:

- i. The test paper consists of **40** multiple choice questions numbered from **1 to 40**, each question followed by four alternatives 1, 2, 3 and 4.
- ii. Mathematics and Mental Ability 1 to 20, Science 21 to 30, English 31 to 40.
- iii. Each question has only one correct option.
- iv. Each correct answer carries **+4 Marks**.
- v. No negative marking for wrong answer.

MATHEMATICS & MENTAL ABILITY (Q.NO.1 TO 20)






1. Using the letters R, O, W, L, E, F form a meaningful word.

- 1) LOWREF 2) FLOWER 3) RELOWF 4) LOWFER

2. If $AB = 12$, $CD = 34$ then $FE =$ _____

- 1) 56 2) 65 3) 75 4) 57

3. The picture table shows the number of children who came to dance class on Sunday in each week.

Story Hour Attendance	
Week	Number of Children's
1	
2	
3	
4	
Each  = 5 children's	

How children came to dance class in week 4?

- 1) 15 2) 25 3) 20 4) 10

4. Which is the biggest value?

- 1) 300m 2) 200m 3) 200cm 4) 300cm

CLASS-III

5. If 1 HAT length = 7cm then length of 5 HATS is _____ cm.
1) 14 2) 28 3) 35 4) 42
6. Write the Hindu Arabic Numeral for XXV _____.
1) 35 2) 45 3) 55 4) 25
7. Round off 736 to the nearest 100.
1) 600 2) 500 3) 700 4) 800
8. 5 Hundreds 15 ones = _____.
1) 505 2) 515 3) 500 4) 501
9. $17 \times 3 =$ _____
1) 21 2) 41 3) 51 4) 91
10. 4000g = _____ kg.
1) 1 2) 10 3) 4 4) 3
11. $559 - 19 =$ _____.
1) 240 2) 530 3) 540 4) 520
12. 9069 _____ 9096.
1) < 2) > 3) = 4) none of these
13. 3, 6, 9, 12, _____.
1) 10 2) 15 3) 12 4) 18
14. What is the biggest 2digit numbers using 8 and 5 only once.
1) 84 2) 58 3) 85 4) 55
15. A cylinder has _____ vertices.
1) 2 2) 4 3) 1 4) 0
16. $5+4=$ _____ + 3.
1) 4 2) 7 3) 6 4) 2

CLASS-III

17. 17,21,25,29. _____.

- 1) 32 2) 35 3) 34 4) 33

18. $110 - \underline{\hspace{2cm}} = 99$.







- 1) 12 2) 9 3) 11 4) 20

19. Figures that have same shape and size are called _____ figures.

- 1) Different 2) Congruent 3) Special 4) None

20. The picture in table below shows the number of students who absent in a day of a particular week

On which day more students were absent?

Monday	
Tuesday	
Wednesday	
Thursday	_____
Friday	
Saturday	
Each  means 4 students	

- 1) Tuesday 2) Thursday 3) Friday 4) Saturday

SCIENCE (Q.NO.21 TO 30)

21. Which organ of your body helps you to take in oxygen and gives out carbon dioxide?

- 1) Lungs 2) Kidneys 3) Stomach 4) Teeth

22. This system protects the inner body parts from getting injured.

- 1) Circulatory system 2) Digestive system
3) Skeletal system 4) Excretory system

23. The state of matter changing from liquid to solid is called:

- 1) Evaporation 2) Freezing 3) Melting 4) Condensation

CLASS-III

24. Which one is the correct statement?

- 1) Solids have fixed shape. 2) Solids have fixed size.
3) Solids have fixed volume. 4) All the above

25. Which is an abiotic component of the environment?

- 1) Plants 2) Water 3) Animals 4) Humans

26. Foods like chapati, rice and potato wedges are rich in _____.

- 1) Carbohydrates 2) Proteins 3) Vitamins 4) Minerals

27. We get vitamins and minerals if we eat _____.

- 1) Vegetables 2) Fruits
3) Protective foods 4) All of these

28. Which plant needs external support to stand?

- 1) Herbs 2) Climbers 3) Shrubs 4) Trees

29. Which among the following is not a component of environment?

- 1) Sunlight 2) Plants 3) Animals 4) None of these

30. Omnivores are the animals which eat:

- 1) only plants 2) only animals
3) both plants and animals 4) neither plants nor animals

ENGLISH (Q.NO.31 TO 40)

31. Select the choice that identifies the noun in the sentence.

Tony was extremely proud of his new home.

- 1) extremely 2) proud 3) new 4) home

32. Choose the correct personal pronoun.

Harry and Alex would like to invite _____ to the party too.

- 1) they 2) we 3) you 4) he

CLASS-III

33. Choose the correct option.

There _____ five guests at the hotel last week.

- 1) is 2) was 3) were 4) is

34. Choose the correct article.

Yesterday was _____ coldest day of the season.

- 1) a 2) an 3) the 4) no article

35. Choose the sentence with correct comma and full stop placement.

- 1) My best friends are Rina, Mary and Susan
2) My best friends are rina, Mary and susan.
3) My best friends are Rina, Mary and Susan.
4) My best friends are Rina, Mary, Susan.

36. What is the plural form of mouse?

- 1) mouses 2) mice 3) mices 4) mousess

37. Which word means the OPPOSITE of the word “lost” in the sentence below?

Paul lost his favourite soft toy.

- 1) lose 2) found 3) hugged 4) threw

38. Which of the following pair of words rhyme?

- 1) cake, quick 2) house, mouse 3) finger, fighter 4) hope, soft

39. Select the correctly spelt word.

- 1) bouqet 2) bowkay 3) bouquet 4) bokey

40. Choose the word that comes LAST in alphabetical order.

- 1) water 2) wrinkle 3) wink 4) wow