



Instructions:

- i. The test paper consists of **40** multiple choice questions numbered from **1 to 40**, each question followed by four alternatives 1, 2, 3 and 4.
- ii. Mathematics and Mental Ability 1 to 20, Science 21 to 30, English 31 to 40.
- iii. Each question has only one correct option.
- iv. Each correct answer carries **+4 Marks**.
- v. No negative marking for wrong answer.

MATHEMATICS & MENTAL ABILITY (Q.NO.1 TO 20)

- 1. The greatest 4-digit number is____.
1) 999 2) 99 3) 9999 4) 1000
- 2. The successor of the number 1999 is____.
1) 3000 2) 2001 3)2000 4) 1998
- 3. Add $531+647 =$ _____.
1) 1178 2) 1078 3) 1278 4) 1378
- 4. 4 Thousands-5 tens = _____.
1) 3950 2) 3850 3) 3500 4) 3995
- 5. Which of the following are even numbers?
535,678,990,437,239,124
1) 535,437,239 2) 124,678,990 3) 124,535,990 4) 535,437,124
- 6. There are 568 people watching a game in a football stadium and there are 26 empty seats.
What is the total number of seats in the stadium?
1) 542 2) 594 3) 534 4) 584
- 7. In $654 \div 6$, quotient = _____ and remainder = _____.
1) 109, 2 2) 108,0 3) 119,5 4) 109, 0


CLASS-III

8. There are 20 students in a class. Each student has 8 rupees. How much money is there in all?

- 1) 16 2) 8 3) 180 4) 160






9. Which of the following is closed figure?

- 1)  2)  3)  4) 

10. A cylinder  has _____ vertices.

- 1) 3 2) 0 3) 2 4) 1

11. How many green cars are more than blue cars in the given picture.

Car Color	Number of cars
Red Car 	16
Green Car 	12
Blue Car 	5
Black Car 	4
Orange Car 	13

- 1) 12 2) 17 3) 7 4) 6

12. 5km 100 m= _____ m

- 1) 5200 2) 5000 3) 4900 4) 5100

13. In a bag there are 3kg  potatoes, 6kg  onions and 15 kg  fruits. What is the total weight of the bag?

- 1) 24kg 2) 21kg 3) 18kg 4) 20kg

14. The tally chart shows how many were sold during the weekends. In the given chart which item sold most?

Food Items	Tally Marks
 Burger	
 Pizza	
 Fried Chicken	
 Hot Dog	

- 1) Burger 2) Pizza 3) Fried chicken 4) Hot dog

CLASS-III

15. Arrange the numbers given number in Ascending number.

6331, 364, 1982, 256

1) 256, 364, 1982, 6331

2) 6331,1982, 364, 256

3) 364,256,1982,6331

4) 6331, 364, 1982, 256

16. 21, 28, 35, 42_____,56.

1) 14

2) 7

3) 63

4) 49

17. Which one is the 24th position of alphabet, when alphabets are arranged in alphabetic manner?

1) X

2) Y

3) Z

4) W

18. Find the missing number in the given number puzzle.

3	5
?	7

1) 4

2) 6

3) 8

4) 11

19. The number in the question below is to be codified in the following code:

Digit 7 2 1 5 3 9 8 6 4

Letter W L M S I N D J B

Find the respective code for "184632"?

1) MDJBSI

2) MDJBIL

3) MDJBWL

4) MDBJIL

20. Arrange the given letters to form a meaningful word.

E, A, D, R

1) EADR

2) REDA

3) DAER

4) READ

SCIENCE (Q.NO.21 TO 30)

21. Which one of the following part is called as food factory of the plant?
1) Leaves 2) Stem 3) Roots 4) Flowers
22. Which of these carry water into a leaf?
1) Leaf blade 2) Veins 3) Chlorophyll 4) Root
23. Which one of the following is the first step of food's digestion?
1) Chewing the food
2) Mixing of food with saliva in the mouth
3) Swallowing
4) Both 1 & 2
24. The small opening in seed through which water enters is called as
1) Radicle 2) Plumule 3) Micropyle 4) Cotyledons
25. Water has:
1) Fixed shape 2) No fixed shape 3) No weight 4) Strong well
26. Which disease is caused by deficiency of iodine?
1) Night blindness 2) Goitre 3) Scurvy 4) Rickets
27. The burning of fire needs?
1) oxygen 2) carbon dioxide 3) Nitrogen 4) water vapour
28. An example of biotic components in nature is
1) cells 2) organisms
3) organic molecules 4) all of the above
29. Rocks break into smaller particles under the effect of _____ and form soil.
1) Temperature change 2) Water 3) Wind 4) All of these
30. Kidney bean or rajma is type of _____.
1) cereal 2) pulses 3) spices 4) milk product

ENGLISH (Q.NO.31 TO 40)

31. Which is the correct spelling?

- 1) Beginning 2) Begginning 3) Begining 4) Biginning

32. Choose the correct punctuation.

Delhi Mumbai Kolkata and Chennai are the metropolitans of India.

- 1) Colon 2) apostrophe 3) comma 4) full stop

33. Fill in the blank with the correct article.

I never saw _____ elf.

- 1) a 2) an 3) the 4) no article

34. Identify the pronoun in the following sentence.

The girls standing under the tree are eating their lunch.

- 1) girls 2) tree 3) their 4) under

35. Identify the common nouns in the following sentence.

He would not leave the bag for a single moment.

- 1) He 2) leave 3) bag 4) moment

36. Fill in the blank with the correct verb.

The servants are _____ for him.

- 1) search 2) searching 3) look 4) hearing

37. Antonym of MILITARY _____.

- 1) Civilian 2) Militant 3) Gentle 4) Coup

38. Fill in the blank with the correct option.

‘Have you finished that report?’ ‘I _____ working on it.’

- 1) am 2) was 3) is 4) were

39. Which answer shows a pair of words that rhyme?

- 1) girl, kitten 2) drum, crumb 3) glass, pencil 4) weather, storm

40. Arrange the given words in alphabetical order and tick the one that comes in the third position?

- 1) Heaven 2) Hillock 3) Hawker 4) Hilt