






Instructions:






- i. The test paper consists of **40** multiple choice questions numbered from **1 to 40**, each question followed by four alternatives 1, 2, 3 and 4.
- ii. Mathematics and Mental Ability 1 to 20, Science 21 to 30, English 31 to 40.
- iii. Each question has only one correct option.
- iv. Each correct answer carries **+4 Marks**.
- v. No negative marking for wrong answer.

MATHEMATICS & MENTAL ABILITY (Q.NO.1 TO 20)

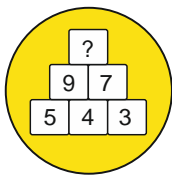
1. Standard form of $6000 + 500 + 70 + 3 =$ _____.
 1) 6573 2) 6753 3) 6375 4) 3765
2. 3698 _____ 8639 .
 1) $>$ 2) $<$ 3) $=$ 4) \leq
3. Using I, V, X we can write numbers up to _____.
 1) 29 2) 39 3) 49 4) 50
4. $6209 +$ _____ $= 7209$.
 1) 100 2) 0 3) 1000 4) 10
5. Radhika bought 385  apples and Geeta bought 523  apples. How many more apples did Geeta buy?
 1) 183 2) 138 3) 831 4) 908
6. A  cube has _____ vertices.
 1) 6 2) 12 3) 8 4) 0
7. The number by which the multiplicand is multiplied is called the _____.
 1) Sum 2) multiplier 3) product 4) minuend
8. A line segment has _____ length.
 1) indefinite 2) definite 3) equal 4) no
9. A2, B4, C6, D8, _____
 1) G10 2) F10 3) E10 4) H10

CLASS-III

10. $168 \div 3 = \underline{\hspace{2cm}}$
 1) 33 2) 34 3) 56 4) 35
11. Which of the following is an example for improper fraction?
 1) $\frac{1}{2}$ 2) $\frac{4}{3}$ 3) $\frac{8}{9}$ 4) $\frac{3}{5}$
12. $3\text{km } 150\text{m} = \underline{\hspace{2cm}}\text{m}$
 1) 3050 2) 3150 3) 3105 4) 3500
13. $7\text{L } 40\text{mL} = \underline{\hspace{2cm}}\text{mL}$
 1) 7400 2) 7200 3) 7040 4) 7004
14. 25, 50, 75, , 125
 1) 150 2) 95 3) 100 4) 90
15. $13 + \underline{\hspace{2cm}} = \text{Odd number.}$
 1) 3 2) 6 3) 7 4) 9
16. How many extra-large shirts are there?

Number of T-shirt ordered	
Size	Number Ordered
Small	
Medium	
Large	
Extra Large	
Each  = 7 T-shirt	

- 1) 32 2) 52 3) 42 4) 30
17. If in a certain language if WALK is coded as 1234 and TALK is coded as 5234, then state which is the correct code for the word TALL ?
 1) 5233 2) 5333 3) 5433 4) 5432
18. What is the missing number in the given picture ?



- 1) 15 2) 16 3) 32 4) 2
19. 24, 30, 36, 42, 54.
 1) 54 2) 60 3) 48 4) 18
20. Round off the number 459 to the nearest 100.
 1) 900 2) 400 3) 500 4) 1000

SCIENCE (Q.NO.21 TO 30)

21. In fibrous roots:
- 1) small side roots grow from a main root.
 - 2) number of roots grows from the end of stem.
 - 3) parallel roots grow from the stem.
 - 4) branches of the plant grow roots.
22. Stomata is present on _____.
- 1) Inner side of leaves
 - 2) Upper side of leaves
 - 3) Underside of leaves
 - 4) Outer side of leaves.
23. Which among the following statements is not true about water?
- 1) Water exists in three states.
 - 2) Steam condenses to form water.
 - 3) Water vapour is in liquid state.
 - 4) Water becomes steam on boiling.
24. Which of the following is a property of air?
- 1) It fills space
 - 2) It has weight.
 - 3) It gives shape to things
 - 4) All the above
25. _____ are the smallest unit of our body.
- 1) Tissues
 - 2) Cells
 - 3) Muscles
 - 4) Organs
26. Framework formed by the bones of our body is:
- 1) Spinal cord
 - 2) Skeletal system
 - 3) Muscular system
 - 4) Nervous system
27. Which is the longest bone in human body?
- 1) Thighbone
 - 2) Backbone
 - 3) Leg bone
 - 4) Upper arm bone
28. Which among the following is not a state of matter?
- 1) Solid
 - 2) Liquid
 - 3) Gas
 - 4) Ash
29. While boiling a glass of water, which change occurs in the state of matter?
- 1) Solid into liquid
 - 2) Liquid into gas
 - 3) Gas into liquid
 - 4) Liquid into solid
30. Which of the following organisms can produce food on their own?
- 1) Birds
 - 2) Fish
 - 3) Animals
 - 4) Plants

ENGLISH (Q.NO.31 TO 40)



31. Name the shadow of famous cartoon

- 1) Mickey mouse 2) Minnie mouse 3) Donald duck 4) Jerry

32. The word used to describe- to get back something that was lost

- 1) Regain 2) retain 3) refer 4) rejoice

33. choose the plural form of the underlined word - He fell off the tree and broke his tooth

- 1) Teeth 2) tooths 3) teeths 4) toothes

34. Which of the following has the same spelling for plural as its singular?

- 1) Kite 2) Sheep 3) Tooth 4)ship

35. Choose the correctly punctuated sentence

- 1) would you like to have a glass of milk
2) Would you like to have a glass of milk
3) Would you like to have a glass of milk?
4) “would you like to have a glass of milk?”

36. Match the following

- | | | |
|-----------------|--------|------------|
| i. A colony of | () | a. fish |
| ii. A bunch of | () | b. ants |
| iii. A pile of | () | c. clothes |
| iv. A school of | () | d. keys |
- 1) i – b, ii – a, iii – c, iv – d 2) i – b, ii – d, iii – c, iv - a
3) i – b, ii – c, iii – d, iv – a 1) i – b, ii – d, iii – a, iv - c

CLASS-III

37. The word which rhymes with 'peep'

- 1) pip 2) keep 3) ripe 4) pipe

38. Choose the suitable article – While returning to the castle, _____ queen saw _____ beggar boy.

- 1) the, a 2) an, a 3) an, the 4) the , a.

39. Which is the correct spelling of the following

- 1) Twelveth 2) Twelfth 3)Twelth 4) Twelvth



40. Name the book in which we find these characters of the given image

- 1) Huckleberry Finn 2) the great expectations
3) The jungle book 4) Malgudi Days